

GR 5 U3 HW 5

Name \_\_\_\_\_

Date \_\_\_\_\_

Do the multiplications in A, B and C.

A. 1)  $4 \times 82$

2)  $7 \times 609$

3)  $3 \times 295$

B. 4)  $5 \times 924$

5)  $9 \times 137$

6)  $6 \times 572$

C. 5)  $4 \times 8072$

6)  $7 \times 1487$

7)  $8 \times 2690$

GR 5 U3 HW 6

Name \_\_\_\_\_

Date \_\_\_\_\_

Do A, B and C.

A. Estimate the product:

1)  $29 \times 51$

2)  $43 \times 59$

B. Use the digits 3, 4, and 6 in the blanks below to make:

1) the **largest** possible product. \_\_\_\_\_  $\times$  \_\_\_\_\_ = \_\_\_\_\_

2) The **smallest** possible product \_\_\_\_\_  $\times$  \_\_\_\_\_ = \_\_\_\_\_

C. Use the digits 3, 4, 6, and 8 in the blanks below to make:

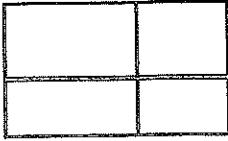
1) the **largest** possible product. \_\_\_\_\_  $\times$  \_\_\_\_\_ = \_\_\_\_\_

2) The **smallest** possible product \_\_\_\_\_  $\times$  \_\_\_\_\_ = \_\_\_\_\_

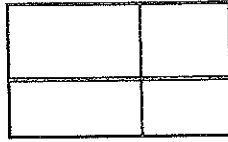
Do both A and B.

A. Do the following multiplications. Use the arrays provided.

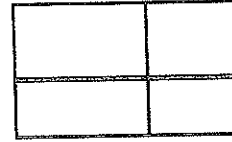
1)  $15 \times 24$



2)  $31 \times 56$



3)  $73 \times 29$



B. Use the digits 4, 5, 7, and 9 in the blanks below to make:

1) The **largest** possible product. \_\_\_\_\_  $\times$  \_\_\_\_\_ = \_\_\_\_\_

2) The **smallest** possible product \_\_\_\_\_  $\times$  \_\_\_\_\_ = \_\_\_\_\_

Do A, B and C.

A. Do the following multiplications. Use the arrays provided.

1)  $62 \times 28$



2)  $37 \times 86$



3)  $45 \times 69$



B. Multiply:

1)  $20 \times 70$

2)  $300 \times 80$

3)  $45 \times 200$

C. Do the following multiplications. Show your thinking.

1)  $37 \times 86$

2)  $104 \times 86$

3)  $45 \times 690$