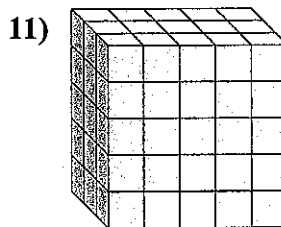
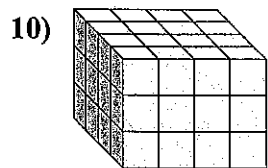
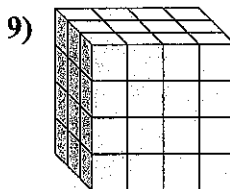
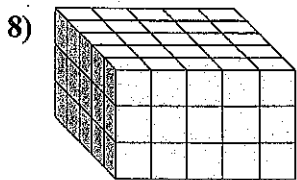
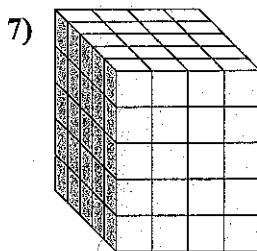
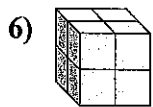
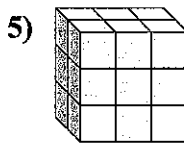
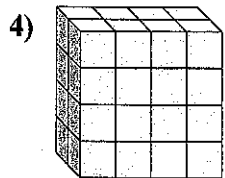
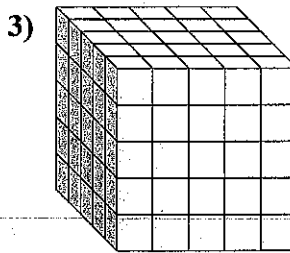
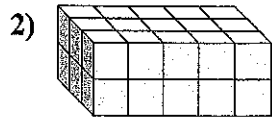
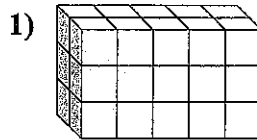
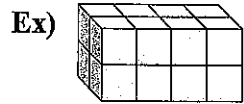




Find the length, width and height of the rectangular prism. Then find the volume.



Answers

L W H V

Ex. 2 4 2 16

1. _____

2. _____

3. _____

4. _____

5. _____

6. _____

7. _____

8. _____

9. _____

10. _____

11. _____