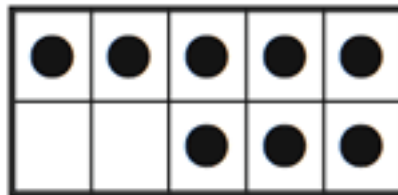
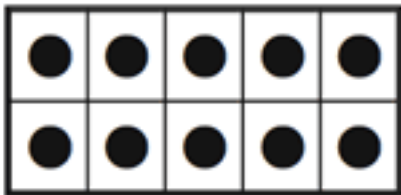


Problem of the Week

Grade K

Name: _____ Class: _____

Mrs. Thompson was taking attendance in KT. She filled in one dot on the ten frame for each student that was in school. How many students were in school? BONUS: How many MORE students does Mrs. Thompson need in KT to fill the second ten frame?



There were _____ students in school.

KT needs _____ more students to fill the second ten frame.

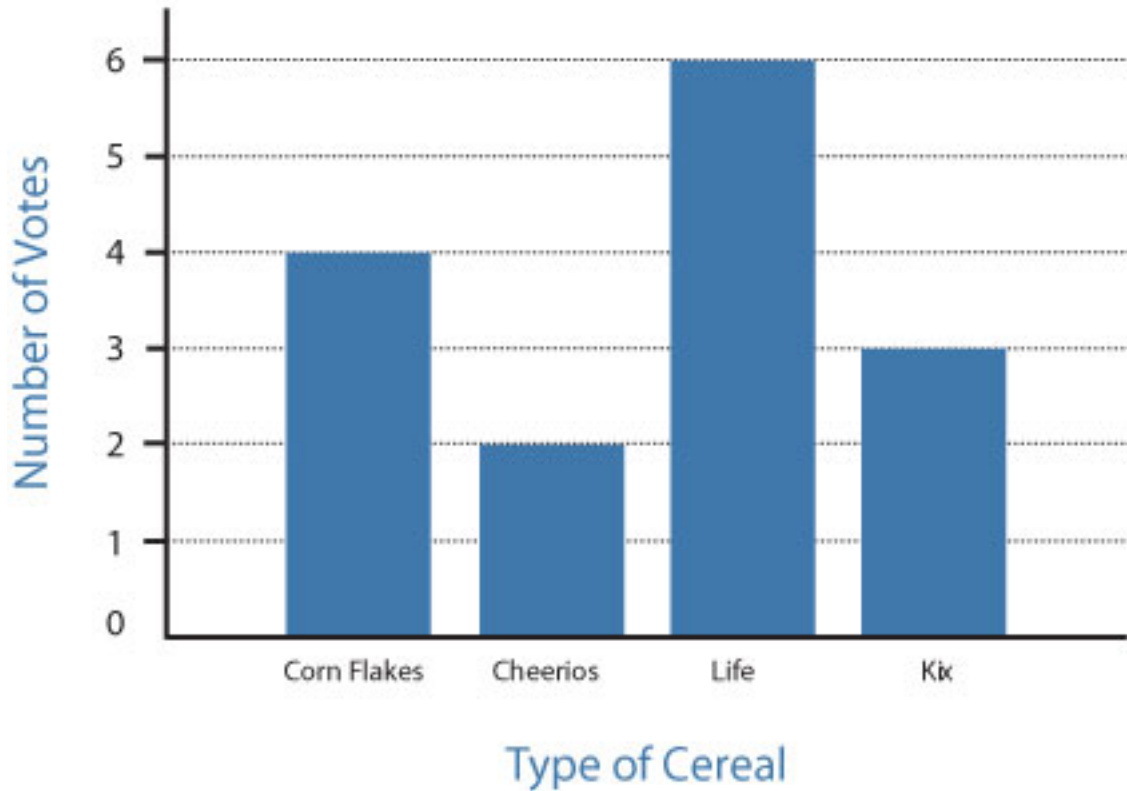
Here's how I know:

Grades 1-2

Name: _____

Class: _____

Favorite Cereal



The graph above shows the favorite cereal of students.

- 1) Which cereal is the most popular? _____
- 2) Which cereal is the least popular? _____
- 3) How many MORE students like Life than Kix? _____
- 4) How many students voted all together? _____
- 5) Color a box in the graph to show which cereal is your favorite.

Grades 3-5

Name: _____

Class: _____

		6
3		
		2

Fill in the one-digit numbers in the answer columns so that the sum of each row, column and diagonal add to 15.